



ASSIGNMENT FOR ANNUAL EXAMINATION ( 2025 – 26 )

Student name				
Date		Grade	II	Roll no.
Subject	MATHS	Marks		Teacher's sign

**Q1. Find the answer of following digits.**

a  $2 \times 5 = \underline{\quad}$

b  $42 \times 4 = \underline{\quad}$

c  $30 \times 1 = \underline{\quad}$

d  $9 \times 8 = \underline{\quad}$

e  $65 \times 3 = \underline{\quad}$

f  $55 \times 2 = \underline{\quad}$

g.  $10 \div 2 = \underline{\quad}$

h.  $15 \div 5 = \underline{\quad}$

i.  $32 \div 4 = \underline{\quad}$

j.  $14 \div 2 = \underline{\quad}$

k.  $18 \div 6 = \underline{\quad}$

l.  $21 \div 3 = \underline{\quad}$

**Q2 Write down fill in the blanks.**

a. There are 365 days in a year.

b. March month has a 31 days.

c. We eat ice cream in summer.

d. January come after December.

e. A week has a 7 days.

f. February has 29 days in a leap year.

g. 1 hour = 60 minutes.

h. 1minute = 60 seconds.

i. 1 day =24 hours.

j. May comes between April and June.

k. Christmas is celebrated in the month of December.

l. We wear coats and sweaters in winter season.

m. We eat mangoes in summer season.

n. 1Rupees has 100 Paisa.

o. The sun rise in the east.

**Q3. True and False.**

- a. September month has 30 days. = True
- b .1 Rupees has 100 Paisa. = True
- c .One day has a 24 days. = False
- d.  $3 \times 5 = 20$  = False
- e.  $18 \div 9 = 2$  = True
- f .One year has 400 days. = False
- g. The sun set in the west. = True
- h .East is in the opposite direction of South. = False
- g .We use to AC in winter. = False
- h. 15<sup>th</sup> August is Independence day. = True
- g .The sun rises in the south. = False
- h. Leap year has a 366 days. = True
- i .January month has 30 days. = False
- j. November has 31 days. = False

**Q4 Write Tally marks 1 to 10.**

1 I	6 $\text{    }$ I
2 II	7 $\text{    }$ II
3 III	8 $\text{    }$ III
4 IIII	9 $\text{    }$ IIII
5 $\text{    }$	10 $\text{    }$ $\text{    }$

**Q5 Write Roman number 1 to 20.**

1 I	11 XI
2 II	12 XII
3 III	13 XIII
4 IV	14 XIV
5 V	15 XV
6 VI	16 XVI
7 VII	17 XVII
8 VIII	18 XVIII
9 IX	19 XIX
10 X	20 XX

**Q6 Answer the following questions.**

1. How many 10 paisa coins will make Rs 1.

Ans 10 coins

2. How many 20 paisa coins will make Rs 1.

Ans 5 coins

3. How many 25 paisa coins will make Rs 1.

Ans 4 coins

4. How many 50 paisa coins will make Rs 1.

Ans 2 coins

5. How many months have 31 days? write name.

Ans There are 7 months which have 31 days.

There are January, March, May, July, August, October, December.

6. How many months have 30 days? Write name.

Ans There are 4 months which have 30 days.

There are April, June, September, November.

**Q7 Word problem.**

1. Neha bought a pencil for Rs 5 and a Note book for Rs 20. How much did she spend?

$$\begin{array}{r} \text{T} \quad \text{O} \\ \text{Rs } 0 \quad 5 \\ + \text{Rs } 2 \quad 0 \\ \hline \\ \hline \end{array}$$

2. A bicycle has a 2 wheels . How many wheels are there in 7 bicycles ?

1 bicycle has 2wheels

4 bicycle have ?

$$4 \times 2 = 8 \text{ wheels}$$

3. A cow has 4 legs. How many legs do 5 cows have ?

1 cow has 4 legs.

5 cow have legs ?

$$5 \times 4 = 20 \text{ legs.}$$

4. Sarika has Rs 20. She spend Rs 10. How much money is left her ?

$$\begin{array}{r} \text{T} \quad \text{O} \\ \text{Rs } 2 \quad 0 \\ - \text{Rs } 1 \quad 0 \\ \hline \\ \hline \end{array}$$

5. A week has 7 days .How many days are there in 5 weeks ?

1 week has 7 days.

5 weeks have days ?

$$5 \times 7 = 35 \text{ days.}$$

6. Simmi has 3 pairs of shoes .How many shoes does have ?

1 pair has 2 shoes.

3 pairs have shoes ?

$$3 \times 2 = 6 \text{ shoes.}$$

7. A Star fish has 5 arms. How many arms do 6 star fishes have ?

1star fish has 5 arms.

6 star fish have ?

$$6 \times 5 = 30 \text{ arms.}$$

8. If we divide 15 ice cream equally among 5 children , each child will get ice cream ?

$$15 \div 5 = 3$$

Each child get 3 ice cream.

9. Share 24 bananas equally among 3 monkeys?

$$24 \div 3 = 8$$

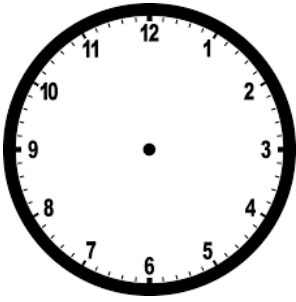
Each monkey will get 8 bananas.

10. 12 balloons are to be distributed equally among 4 groups . Each groups will have balloons ?

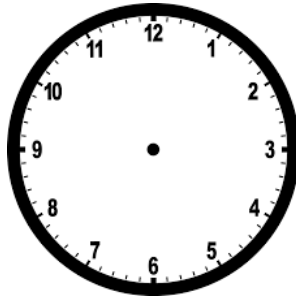
$$12 \div 4 = 3$$

Each group has 3 balloons.

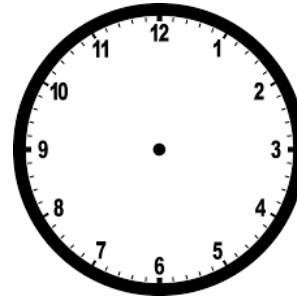
Q8 Draw the minute hand in blue and the hour hand in red to show the given time.



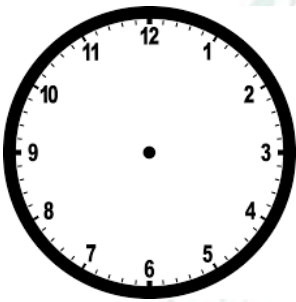
2:00



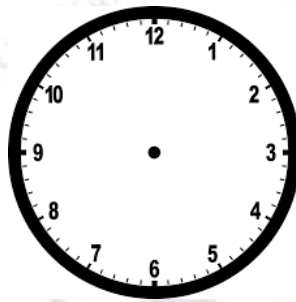
4:25




7:30



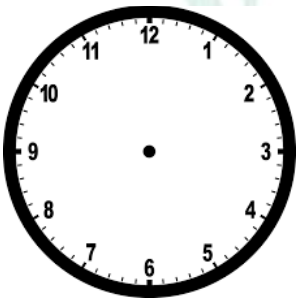
2:15




3:45



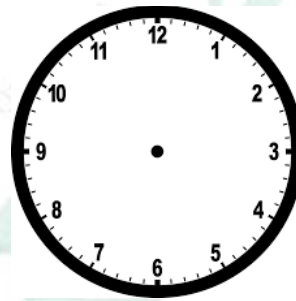
6:00



8:10



10:00



9:35